



**LIONS PUBLIC SCHOOL**  
**MODEL TEST PAPER-2[ SESSION 2022-23]**  
**SUBJECT: ENGLISH**

TIME: 3 HOUR

M.M: 60

TOTAL NO. OF PRINTED PAGES-05

**GENERAL INSTRUCTIONS:**

- (i) There are 13 questions in all. All questions are compulsory.  
(ii) This question paper has four sections: Section A, Section B, Section C and Section D

**SECTION 'A' READING****1. Read the passage carefully and answer the questions that follow. (5)**

Nagaland, one of India's smallest states, is located in the north-east. It is bounded by Myanmar on the east, Arunachal Pradesh on the north, Assam on the west and Manipur on the south. Nagaland is mostly mountainous except the part bordering the Assam Valley. Mount Saramati is the highest peak and forms a natural barrier between Nagaland and Myanmar. The Nagas, inhabitants of Nagaland form more than twenty tribes. Konyak is the largest of Naga tribes. The Nagas celebrate their festivals with great enthusiasm. Almost every Naga tribe has its own festivals. Shawls, shoulder bags, woven mats and baskets make magnificent remembrance for the tourists.

**1.1 Choose the correct answer:**

a) Where is Nagaland located?

- i) in the east                      ii) in the west                      iii) in the south                      iv) in the north-east

b) What forms a natural barrier between Nagaland and Myanmar?

- i) Mount Saramati                      ii) Mount Everest                      iii) The Himalayas                      iv) Aravali

c) Which state is located on the west of Nagaland?

- i) Arunachal Pradesh                      ii) Assam                      iii) Manipur                      iv) Myanmar

**1.2 Fill in the blanks:**

a) The Nagas celebrate their festivals with \_\_\_\_\_.

b) \_\_\_\_\_ is the largest of Naga's tribes.

**1.3 Answer the following questions:**

a) Which part of Nagaland is not mountainous?

b) What are the inhabitants of Nagaland called?

c) Name the things that make remembrance for the tourists.

d) Write any two adjectives from the passage. \_\_\_\_\_

e) Give the opposite of 'smallest' \_\_\_\_\_

**2. Read the passage carefully and answer the questions that follow: (5)**

Moral values play an essential role in student's life. They help to build a positive character with traits such as compassion, respect, kindness, and humility. They can make students to distinguish between right and wrong or good and bad.

Helpfulness is a quality that most of us value on some level. We appreciate when someone helps us, particularly in times of need. There is also an enormous feeling of satisfaction to be realized when you are able to uniquely offer help to someone else.

**2.1 Choose the correct answer:**

a) What can make students to distinguish between right and wrong?

- i) feelings                      i) emotions                      iii) moral values                      iv) respect

**2.2 Fill in the blanks:**

a) Moral values help to build a positive character with traits such as \_\_\_\_\_.

b) \_\_\_\_\_ is a quality that most of us value on some level.

**2.3 Answer the following questions:**

a) What plays an essential role in student's life?

\_\_\_\_\_

b) Give the opposite of 'positive' \_\_\_\_\_

**SECTION 'B' WRITING**

**3. Write a letter to your friend congratulating him/ her for securing first position in the class. (5)**

\_\_\_\_\_

\_\_\_\_\_

\_\_\_\_\_

\_\_\_\_\_

\_\_\_\_\_

\_\_\_\_\_

\_\_\_\_\_

\_\_\_\_\_

\_\_\_\_\_

\_\_\_\_\_

---

---

---

---

**4. Complete the story with the help of given words: (5)**

[ **admired court blindness greedy punished cheated treatment fees fine daily** ]

An old rich lady was blind. She called a doctor for \_\_\_\_\_. The doctor was a \_\_\_\_\_ person and asked for the huge fees. The lady agreed to pay the \_\_\_\_\_ only if she is fully cured. The doctor visited \_\_\_\_\_ for the treatment. He liked lady's furniture and \_\_\_\_\_ it. The doctor took advantage of lady's \_\_\_\_\_ and removed one piece of furniture every day. The lady was finally cured but she refused to pay doctor's fees. The doctor got angry and went to the \_\_\_\_\_. At the time of hearing the lady told the judge that she was not fully cured as she was not able to see her furniture. The judge got to know that the doctor \_\_\_\_\_ the old lady. The doctor was \_\_\_\_\_ with a huge \_\_\_\_\_.

**SECTION 'C' GRAMMAR**

**5. Fill in the blanks with appropriate prepositions: [1x4=4]**

- a) Sudha's anniversary is \_\_\_\_\_ July. (in/ on)
- b) The cat jumped \_\_\_\_\_ the fence. (over/ above)
- c) Look \_\_\_\_\_ the stars in the sky. (at / on)
- d) Rohan is sitting \_\_\_\_\_ Tom and Anuj. (among/ between)

**6. Fill in the blanks with appropriate conjunctions: [1x4=4]**

- a) He did not attend school \_\_\_\_\_ he was not well.
- b) Are you going to the market \_\_\_\_\_ the fair?
- c) The tree is tall \_\_\_\_\_ green.
- d) I missed the train \_\_\_\_\_ I walked fast.

**7. Fill in the blanks with the proper form of verbs given in the brackets: [1x4=4]**

- a) I \_\_\_\_\_ a movie an hour ago. (watch)
- b) Raman \_\_\_\_\_ the piano every day. (play)
- c) It usually \_\_\_\_\_ in August. (rain)
- d) She \_\_\_\_\_ to Delhi next Sunday. (go)

**8. Fill in the blanks with suitable pronouns:**

**[1x3=3]**

- a) Farah is admired by all of us. \_\_\_\_\_ am her best friend.
- b) The puppy is sleeping. \_\_\_\_\_ looks so cute.
- c) The girls are playing in the garden. \_\_\_\_\_ look very happy.

**SECTION 'D' LITERATURE**

**9. Write the meanings of the following words:**

**[1x3=3]**

- a) Overjoyed - \_\_\_\_\_
- b) Stroll - \_\_\_\_\_
- c) Echoed - \_\_\_\_\_

**10. Frame sentences from the given words:**

**[1x2=2]**

- a) Merchant :- \_\_\_\_\_  
\_\_\_\_\_
- b) Give a hand :- \_\_\_\_\_  
\_\_\_\_\_

**11. Who said these words to whom?**

**[1x3=3]**

- a) "Whose gold ring is this?"  
\_\_\_\_\_
- b) "I think Moti has gone there."  
\_\_\_\_\_
- c) "I can't find Moti. Where could he have gone?"  
\_\_\_\_\_

**12. Read these lines carefully and answer the following questions:**

**[1x3=3]**

I'm writing a letter  
To send by the post,  
It is to the person  
I care for the most.  
I write the date clearly  
And put the address,  
And begin, 'Dearest Mummy,'  
(Did anyone guess?)

a) Write the name of the poem and the poet.

---

b) Who is the poet writing a letter to?

---

c) How does the poet begin the letter?

---

**13. Answer the following questions:**

a) Where did Zeenat ask her friends to go and sit? Why did she do so? [2]

---

---

b) Why did the children go to the other side of the fence? [2]

---

---

c) Why was the rich man impressed with Prakash? [2]

---

---

d) Is Prasanna a true friend? Give reason for your answer. [3]

---

---



**लायंस पब्लिक स्कूल**  
**आदर्श प्रश्नपत्र [सत्र 2022-23]**  
**विषय - हिंदी**

समय : 3 घंटे

कुल अंक - 60

कुल मुद्रित पृष्ठ-06

सामान्य निर्देश :

- (i) प्रश्नपत्र में कुल 20 प्रश्न हैं | सभी प्रश्न अनिवार्य हैं |  
(ii) प्रश्नपत्र में कुल चार खंड हैं: खंड - क, ख, ग और घ

**खंड - 'क'**

**प्रश्न1) दिए गए गद्यांश को पढ़कर प्रश्नों के सही उत्तर के सामने सही ( ✓ ) का निशान लगाइए -(5)**

कठिन परिश्रम से महानता प्राप्त करने वालों में एक नाम नेकचंद जी का भी है | कूड़े में फेंकी गई टाइल्स , डिब्बे आदि को एक नया तथा सुंदर रूप उनके जैसा श्रेष्ठ शिल्पकार ही प्रदान कर सकता है | वे चंडीगढ़ के कृषि विभाग में नियुक्त थे| नए-नए पौधे लगाना, सुंदर-सुंदर फूलों की क्यारियाँ बनाना , उनकी देखभाल करना उनका शौक था | एक दिन बगीचे में उनकी नज़र चीनी मिट्टी के बर्तनों के टूटे हुए ढेर पर पड़ी | उन पर पड़ती सूर्य की किरणों ने उन्हें मोहित कर लिया | उन्होंने उन टुकड़ों को अपने बैग में भर लिया और एक सुनसान जगह पहुँचकर उन टुकड़ों को पत्थर की चट्टान पर जमाने का प्रयत्न किया और अंत में सफल हुए | एक बार एक विदेशी पर्यटक ने राक गार्डन की सुंदर कलाकृतियों को देखकर कहा था "सच्चा कलाकार वही है ,जो हर वस्तु में सौन्दर्य देखता है | नेकचंद भी उन्हीं में से एक हैं |"

क) नेकचंद जी किस विभाग में काम करते थे ?

- i) मौसम विभाग में    ii) परिवहन विभाग    iii) कृषि विभाग    iv) बिजली विभाग

ख) सुनसान जगह पर पहुँचकर उन्होंने टूटे-फूटे टुकड़ों का क्या किया ?

- i) फेंक दिए    ii) जमा दिए    iii) घर बनाया    iv) पहाड़ बनाया

ग) सुंदर-सुंदर फूलों की क्यारियाँ बनाना |' वाक्य में विशेषण शब्द है-

- i) सुंदर    ii) फूल    iii) क्यारियाँ    iv) इनमें से कोई नहीं

घ) नेकचंद जी किस राज्य में कार्य करते थे ?

- i) दिल्ली    ii) चंडीगढ़    iii) बिहार    iv) जयपुर

ङ) गद्यांश का उचित शीर्षक क्या होगा ?

- i) कठिन परिश्रम    ii) महानता    iii) कूड़ा    iv) शिल्पकार

खंड-‘ख’

प्रश्न2) नीचे दिए शब्दों के विलोम शब्द लिखिए - (2)

क) निरर्थक - \_\_\_\_\_ ख) निरक्षर - \_\_\_\_\_

प्रश्न3) निम्नलिखित वाक्यों में उचित क्रिया शब्द भरकर वाक्य पूरा कीजिए - (2)

- (क) वह पत्र लिख \_\_\_\_\_ | (रहा था / रहे थे)  
(ख) रोहन घूमने \_\_\_\_\_ था | (चुका / गया)  
(ग) रीना ईश्वर की \_\_\_\_\_ | (पुजती है / पूजा करती है)  
(घ) हमने भारत और पाकिस्तान का मैच \_\_\_\_\_ | (देखी/ देखा)

प्रश्न4) निम्नलिखित वाक्यों में से विशेषण शब्दों को रेखांकित कीजिए - (2)

- (क) गीता एक योग्य छात्रा है |  
(ख) मोर बहुत सुंदर है ।

प्रश्न5) नीचे दिए गए अव्यय शब्दों से वाक्य बनाइए - (2)

- (क) धीरे-धीरे - \_\_\_\_\_  
(ख) सहसा - \_\_\_\_\_

प्रश्न6) निम्न शब्दों का शुद्ध रूप लिखिए - (2)

- (क) पूजय - \_\_\_\_\_ (ख) निष्ठा - \_\_\_\_\_

प्रश्न7) निम्नलिखित अनेक शब्दों के लिए एक-एक शब्द लिखिए - (2)

- (क) जहाँ पहुँचना कठिन हो - \_\_\_\_\_  
(ख) जिसके समान कोई दूसरा न हो - \_\_\_\_\_

प्रश्न8) निम्न शब्द का एक - एक पर्यायवाची शब्द लिखिए - (2)

- क) विपिन - \_\_\_\_\_ ख) हाथी - \_\_\_\_\_

प्रश्न9) दिए गए वाक्यों में उचित विराम चिह्न लगाइए - (2)

- क) शाबाश तुमने कमाल कर दिया -  
\_\_\_\_\_

- ख) माँ बाजार से कपड़े खिलौने और सामान लाई -  
\_\_\_\_\_

प्रश्न10) निम्नलिखित प्रश्नों के उत्तर दीजिए -

(4)

क) सकर्मक क्रिया किसे कहते हैं ?

उत्तर - \_\_\_\_\_  
\_\_\_\_\_

ख) सार्वनामिक विशेषण किसे कहते हैं ?

उत्तर - \_\_\_\_\_  
\_\_\_\_\_

### खंड-'ग'

प्रश्न -11) नीचे दिए गए गद्यांश को पढ़कर प्रश्नों के उत्तर दीजिए -

(5)

अब भीम उठकर खड़ा हो गया और कहने लगा, "मैं पहले अपनी क्षुधा शांत करना चाहता था लेकिन तुमने मेरे भोजन में विघ्न डालकर अच्छा नहीं किया। अब मैं पहले तुम्हीं से निपटता हूँ, भोजन बाद में कर लूँगा।" फिर तो भीम ने उसे ज़मीन पर पटक-पटककर ज़मीन पर दे मारा। राक्षस गुर्गैया, चिल्लाया और भीम को मारने का भरसक प्रयास किया पर भीम के सामने उसकी एक न चली। काफी परिश्रम के बाद अंततः भीम ने उसे मार गिराया। फिर उसके शव को गाँव वालों के सामने लाकर पटक दिया। बकासुर को मार हुआ देखकर सभी गाँव वाले प्रसन्नता से उछल पड़े। गाँव वालों ने कुंती और उसके पुत्रों को आशीष और धन्यवाद दिया।

क) पाठ का नाम क्या है ?

उत्तर \_\_\_\_\_

ख) राक्षस का नाम क्या था ?

उत्तर \_\_\_\_\_

ग) भीम के भोजन में किसने विघ्न डाला ?

उत्तर \_\_\_\_\_

घ) गाँव वालों ने किसके पुत्रों को आशीष और धन्यवाद दिया ?

उत्तर \_\_\_\_\_

ङ) गद्यांश में से किन्हीं दो संज्ञा शब्दों के नाम लिखिए।

उत्तर \_\_\_\_\_



प्रश्न12) दिए गए शब्दों के अर्थ लिखिए - (2)

क) फुर्ती - \_\_\_\_\_ ख) कीर्ति - \_\_\_\_\_

प्रश्न13) किसने किससे कहा ? (2)

क) पुत्र ! ब्राह्मण का ऋण उतारने का अच्छा अवसर मिला है ।

किसने कहा - \_\_\_\_\_

किससे कहा - \_\_\_\_\_

ख) नहीं-नहीं ,हम खज़ाना खोजने वाला खेल खेलेंगे ।

किसने कहा - \_\_\_\_\_

किससे कहा - \_\_\_\_\_

प्रश्न14) निम्नलिखित प्रश्नों के उत्तर दीजिए - (6)

क) चंद्रशेखर वेंकटरमन के माता-पिता का क्या नाम था ? रमन किस प्रवृत्ति के थे ?

उत्तर - \_\_\_\_\_

\_\_\_\_\_

ख) ब्राह्मण ने कुंती को क्या बताया ?

उत्तर - \_\_\_\_\_

\_\_\_\_\_

ग) सभी जानवरों को मनुष्य जाति पर क्रोध क्यों आ रहा था ?

उत्तर - \_\_\_\_\_

\_\_\_\_\_

प्रश्न15) उचित शब्दों से रिक्त स्थान भरिए - (3)

( जादुई , तक्षशिला , राजानन्द )

क) बालक को \_\_\_\_\_ विश्वविद्यालय में पढ़ने के लिए भेजा गया ।

ख) बौने ने छाते पर \_\_\_\_\_ लेप लगा दिया ।

ग) \_\_\_\_\_ बालक का अद्भुत तेज देखकर हैरान रह गए ।









**LIONS PUBLIC SCHOOL**  
**MODEL TEST PAPER [SESSION 2022-23]**  
**SUBJECT: MATHEMATICS**

TIME: 3 HOURS

M.M: 60

TOTAL NO. OF PRINTED PAGES-05

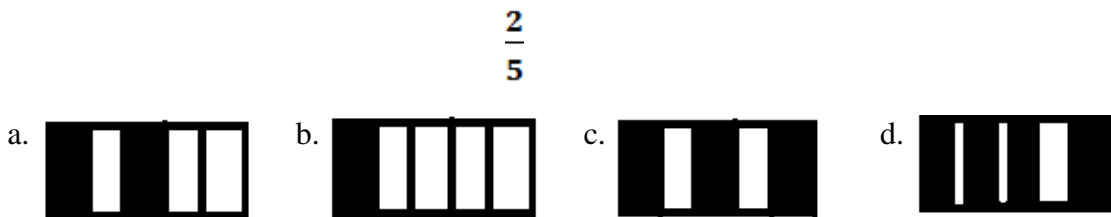
**GENERAL INSTRUCTIONS:**

- (i) There are fifteen (15) questions in all. All questions are compulsory.
- (ii) This question paper has two sections: Section A and Section B.
- (iii) Section A has objective type questions and Section B has descriptive type of questions.

**SECTION 'A'**

**1. Choose the correct option –**

- i. Cost of 1 kg mango is Rs. 150. What is the cost of 10 kg mangos?
  - a. Rs. 1500                      b. Rs. 2250                      c. Rs. 1850                      d. Rs. 1550
- ii. 234.7 is equal to
  - a.  $\frac{2347}{100}$                       b.  $\frac{2347}{1000}$                       c.  $\frac{2347}{10}$                       d.  $\frac{2347}{10000}$
- iii. Write  $\frac{456}{1000}$  as decimal
  - a. 456                      b. 4.56                      c. 45.6                      d. 0.456
- iv. What cost less, if price of grapes is Rs. 230.50 and mangoes is Rs.320.50 per kg.
  - a. Banana                      b. Apple                      c. Grapes                      d. Mango
- v. It is a chart with rectangular bars to represent data.
  - a. Bar graph                      b. Picture Graph                      c. Pictograph                      d. None of these
- vi. To convert smaller units to bigger units, we \_\_\_\_\_
  - a. Multiply                      b. Add                      c. Subtract                      d. Divide
- vii. 25 minutes to 11 is same as
  - a. 10:25                      b. 11.25                      c. 11:35                      d. 10:35
- viii. 12 noon to 12 midnight is denoted by \_\_\_\_\_.
  - a. a.m                      b. noon                      c. morning                      d. p.m
- ix. Area is measured in \_\_\_\_\_ units of length .
  - a. Same                      b. Cube                      c. Square                      d. None of these
- x. Choose the correct figure to represent  $\frac{2}{5}$



**2. Fill in the blanks-**

- i. Half kilogram = \_\_\_\_\_ g

ii. can be written as \_\_\_\_\_ (mixed fraction).

$$\frac{22}{5}$$

iii. Fractions with smaller denominator than numerator are called \_\_\_\_\_ fraction.

iv. When we represent the data using pictures, it is called \_\_\_\_\_

v. The information collected in the form of numerical figures in a survey is called \_\_\_\_\_

### 3. Put >, < or = sign.

i. 23.41 \_\_\_\_\_ 71.42

ii. Rs. 647 \_\_\_\_\_ 64700p

iii. Rs. 200.50 - Rs. 50 \_\_\_\_\_ Rs. 139 + Rs. 40.50

iv. 525p \_\_\_\_\_ Rs. 55

v. \_\_\_\_\_

$$\frac{83}{9} \quad \frac{35}{9}$$

### 4. Write the correct answer -

i. Area of rectangle = length X \_\_\_\_\_

ii. Perimeter of square = \_\_\_\_\_ X side

iii. 180 minutes = \_\_\_\_\_ hour.

iv. 12 weeks 3 day = \_\_\_\_\_ days.

v. 120 months = \_\_\_\_\_ years.

vi. 98 paise = Rs. \_\_\_\_\_

vii. 4 thousandths is written as \_\_\_\_\_

viii.  $329.4 - 50.5 =$  \_\_\_\_\_

ix. Express \_\_\_\_\_ in decimal \_\_\_\_\_

$$\frac{5345}{100}$$

x. C.P=Rs. 4590 , S.P = Rs 5000, is it Profit / Loss ? \_\_\_\_\_ How much ? \_\_\_\_\_

### Section 'B'

### 5. Solve and find the answer :

a. $156\text{ kg } 23\text{ g} - 20\text{ kg } 123\text{ g}$	b. $\begin{array}{r} - \\ \underline{23} \quad \underline{11} \\ 9 \quad 9 \end{array}$	c. $\begin{array}{r} \text{X} \\ \underline{28} \quad \underline{9} \\ 15 \quad 2 \end{array}$

6. Convert 5:40 pm to 24-hours clock time.


7. Check year 1880 is leap year or not.


8. Find the perimeter of rectangle whose length and breadth are 23 cm and 40 cm.



**9. Shilpa earns Rs. 2300 per week. How much will she learn in one month?**


**10. Ritu wants to put lace over the square table. The side of the square table is 20 m. Find the perimeter of table.**


**11. The area of square is 2500 cm<sup>2</sup>. Find the side of square?**





**12. A bakery sold chocolate cake for Rs. 950. The ingredients used to make the cake was Rs.325. Did the bakery make a profit or loss and by how much?**


**13. Maya used 2 m 39 cm red ribbon and 5 m 67cm blue ribbon to make a flower. How much ribbon did she use in all?**

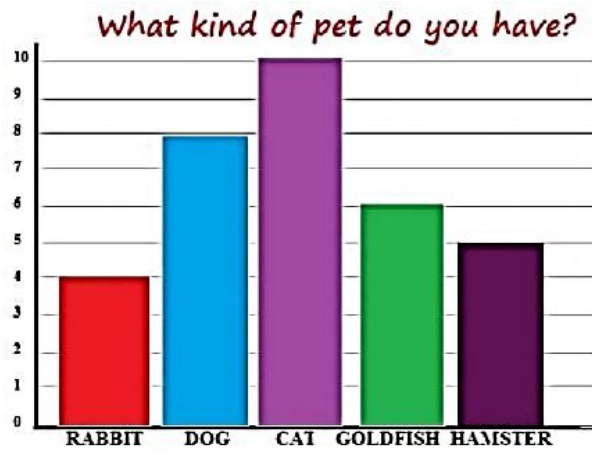

**14. The following information is about the average hours spent by students on different activities. Draw a pictograph to represent the following data:**

<b>Activity</b>	<b>Time Spent</b>
Online Classes	4 hours
Gadgets	4 hours
Self Study	1 hour
Sleep	10 hours
Others	5 hours

--



15. The following information is about the kind of pet do 33 students have?



- i. Which pet was less popular? \_\_\_\_\_
- ii. How many students like dogs? \_\_\_\_\_
- iii. Which pet was most popular? \_\_\_\_\_



**LIONS PUBLIC SCHOOL**  
**MODEL TEST PAPER[SESSION 2022-23]**  
**SUBJECT : SOCIAL SCIENCE**

TIME: 3HOURS

M.M: 60  
TOTAL NO. OF PRINTED PAGES-06

**GENERAL INSTRUCTIONS:**

- (i) There are 8 questions in all.
- (ii) All questions are compulsory.

-----  
**SECTION 'A'**

**Q1. Choose the correct answer-**

**[1X10=10]**

- a) \_\_\_\_\_ soil is dried and baked to make bricks.
  - i) Black
  - ii) Laterite
  - iii) Alluvial
- b) Which soil is formed from lava rocks?
  - i) Sandy
  - ii) Black
  - iii) Alluvial
- c) Forests provide \_\_\_\_\_ wood to make paper.
  - i) Soft
  - ii) Hard
  - iii) Tough
- d) \_\_\_\_\_ forests are found in Andaman and Nicobar Island.
  - i) Thorn
  - ii) Deciduous
  - iii) Evergreen
- e) How is river water taken to the fields?
  - i) Through pipes
  - ii) Through canals
  - iii) Through handpumps
- f) Pandita Ramabai Ranade Worked for the \_\_\_\_\_.
  - i) Education for all
  - ii) Peace and harmony
  - iii) Upliftment of women
- g) Who founded Zoroastrianism?
  - i) Prophet Muhammad
  - ii) Zarathustra
  - iii) St Thomas
- h) \_\_\_\_\_ is called fossil fuel.
  - i) Coal
  - ii) Gold
  - iii) Aluminium
- i) At Panchkula, \_\_\_\_\_ goods are manufactured.
  - i) Leather
  - ii) Hosiery
  - iii) Electronic
- j) \_\_\_\_\_ industries involve large amount of money and big machinery.
  - i) Large Scale
  - ii) Small Scale
  - iii) Cottage

**Q2. Answer the following questions in one word--**

**[1X4=4]**

a) Which forests remain green throughout the year?

---

b)What is the full form of CNG?

---

c) Which soil is found in hilly areas?

---

d) Name a famous human made lake in India.

---

**Q3. Correct the statements-**

**(1x4)**

a) St Francis spread Christianity in India.

---

b) Minerals are renewable resources found in rocks .

---

c) Desert soil can hold large amount of water.

---

d) River water is taken to the fields through hand pump.

---

**Q4. Write one word for the following statements-**

**(1x4=4)**

a) People who are expert in Mathematics \_\_\_\_\_

b) factories where substances such as petroleum oil are refined in to petrol and diesel\_\_\_\_\_

c) Something which is replaced naturally\_\_\_\_\_

d)long poems that tell stories\_\_\_\_\_

**Q5 . Match the following –**

**(1x4=4)**

**I**

- a) Garment industry
- b) Nagarjuna Sagar Dam
- c) Petroleum
- d) Kaziranga National Park

**II**

- National Park
- Small Scale
- Krishna
- Black Gold

**SECTION 'B'**

**Q6. Answer the following questions in about 20-30 words.**

**(2x9=18)**

a) Why are dams called multipurpose projects? Write two points.

---

---

---

b) How is laterite soil formed ?

---

---

---

c) Write two causes of soil erosion.

---

---

---

d) What message did the prophet spread?

---

---

---

e) Differentiate between mine and mining.

---

---

---

f) Name any two places in India where oilfields are located?

---

---

---

g) Where are sugarmills located in India?

---

---

---

h) Who was King Krishnadeva Raya ? What did he do for his people?

---

---

---

i) Where are raw materials changed into finished products?

---

---

---

**Q7. Answer the following questions in 30-40 words.**

**(3x4=12)**

a) Write a short note on the fertility of soil ?

---

---

---

---

---

---

b) Briefly describe Chipko Movement?

---

---

---

---

---

---

c) What did Sir Syed Khan do as a social reformer?

---

---

---

---

---

d) Write one major feature of each of the following industries.

- i) Cottage industry      ii) Small Scale      iii) Large Scale

---

---

---

---

---

---

---

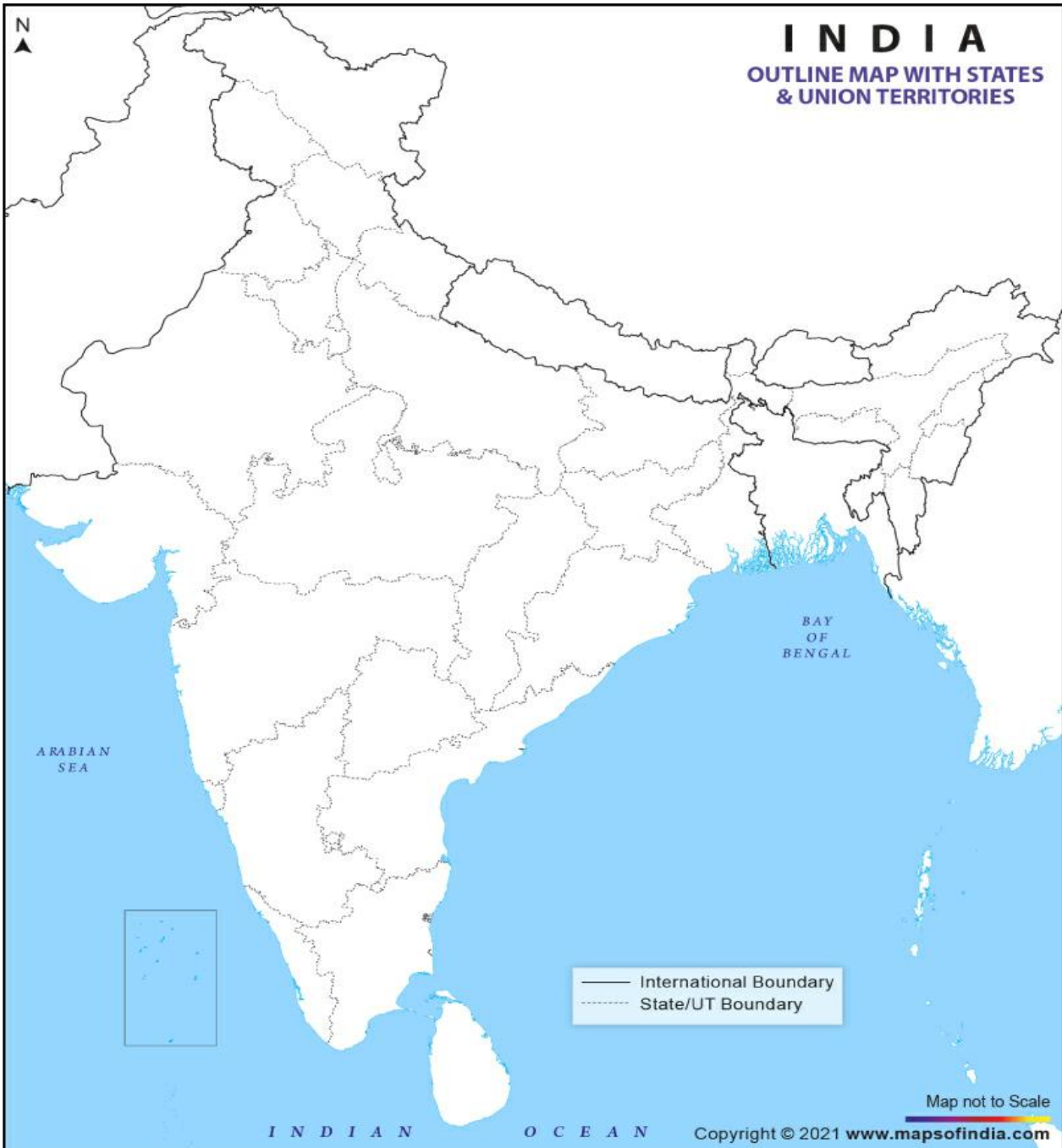
---

---

**Q8. On the given political map of India , mark and name two states with the following minerals. (1x4=4)**

a) Bauxite

b) Manganese







- x) \_\_\_\_\_ is known as continent of Extremes .  
a) Europe            b) Asia            c) Australia            d) America

2. Correct the given statements-- (4)

i) The term span of an elected president of India is 6 years.

---

ii) The cities with less population have Municipal Corporations.

---

iii) Asia is the second largest continent of the world.

---

iv) Fundamental Rights are guidelines for the government.

---

**Q3. Fill in the blanks with suitable words. (4)**

- i) Our constitution was accepted on \_\_\_\_\_.
- ii) \_\_\_\_\_ is the shallowest ocean in the world.
- iii) \_\_\_\_\_ is the imaginary line which runs through the centre of the Earth.
- iv) \_\_\_\_\_ is the coldest planet.

**Q4. Name the following – (4)**

- i) Commander in chief of Indian armed force \_\_\_\_\_
- ii) The upper house of the parliament. \_\_\_\_\_
- iii) The largest planet \_\_\_\_\_
- iv) Head of Municipal Corporation \_\_\_\_\_

**Q5. Give one word answer ----- (4)**

i) Which Ocean is named after a country?

---

ii) What is the spinning of the Earth on its axis called?

---

iii) Which planet is nearest to the Earth.

---

iv) Who is the head of the state?

---

**Q6. Match the following –**

**(4)**

- |                          |                 |
|--------------------------|-----------------|
| I. Republic Day          | a) Governor     |
| II Municipal Corporation | b)Earth         |
| III Blue planet          | c) Constitution |
| IV Head of the State     | d) Big cities   |

**Q7. Answer the following questions-**

**(2x9=18)**

i) Why does the moon appear bigger than the stars?

---

---

ii) Why is there summer in the hemisphere that is tilted towards the Sun ?

---

---

iii) Which continent is called Continent of Science? Why?

---

---

iv) Explain the meaning of democratic republic.

---

---

–

v) What does central Executive consist of?

---

---

vi) What does a Gram Panchayat work for?

---

---

vii) What is a constitution?

---

---

viii) Name two major parts of Indian Ocean.

---

---

ix) Which planet is called the Blue Planet? Why?

---

---

**Q8. Answer the following questions in detail.**

**(3x4=12)**

i) Write any three functions of Municipal Corporation.

---

---

ii) What are Directive Principles? List any four.

---

---

iii) Differentiate between Meteors and Meteorites.

---

---

---

---

iv) What is the Ring of Fire ? Where is it located?

---

---

---

---



**LIONS PUBLIC SCHOOL**  
**MODEL TEST PAPER [SESSION 2022-23]**  
**SUBJECT: SCIENCE**

TIME: 3 HOURS

M.M: 60  
TOTAL NO. OF PRINTED PAGES-5

**GENERAL INSTRUCTIONS:**

- (i) There are 9 questions in all. All questions are compulsory.
- (ii) This question paper has two sections: Section A and Section B

-----  
**SECTION 'A'**

**Q1. Tick the correct option for the following questions. (5 × 1 = 5)**

- a. Forests purify the \_\_\_\_\_ -  
i. Air                      ii. Soil                      iii. Water                      iv. River
  
- b. We should not play \_\_\_\_\_ games.  
i. Indoor                      ii. Outdoor                      iii. Rough                      iv. None
  
- c. Passing water through a filter paper is called \_\_\_\_\_.  
i. Filtration                      ii. Sedimentation                      iii. Decantation                      iv. Chlorination
  
- d. Breakdown of rocks into tiny pieces is called \_\_\_\_\_.  
i. Cooling                      ii. Weathering                      iii. Heating                      iv. Melting
  
- e. Axe is an example of-  
i. Wedge                      ii. Inclined Plane                      iii. Pulley                      iv. Screw

**Q2. Fill in the blanks: (5 × 1=5)**

- a. A push or pull applied on a body is called\_\_\_\_\_.
- b. On the road we should follow \_\_\_\_\_.
- c. A very strong wind is called\_\_\_\_\_.
- d. \_\_\_\_\_ soil is found in desert.
- e. A ball thrown upward falls down due to \_\_\_\_\_.

**Q3. State whether True or False: (5 × 1=5)**

- a. A fungus called yeast help to make soft cakes and bread. \_\_\_\_\_
- b. Diamond and ruby are precious stones \_\_\_\_\_
- c. Force can stop a moving object \_\_\_\_\_
- d. Cutting down of trees in a large number is called deforestation. \_\_\_\_\_
- e. Process of adding chlorine in water is called sedimentation \_\_\_\_\_

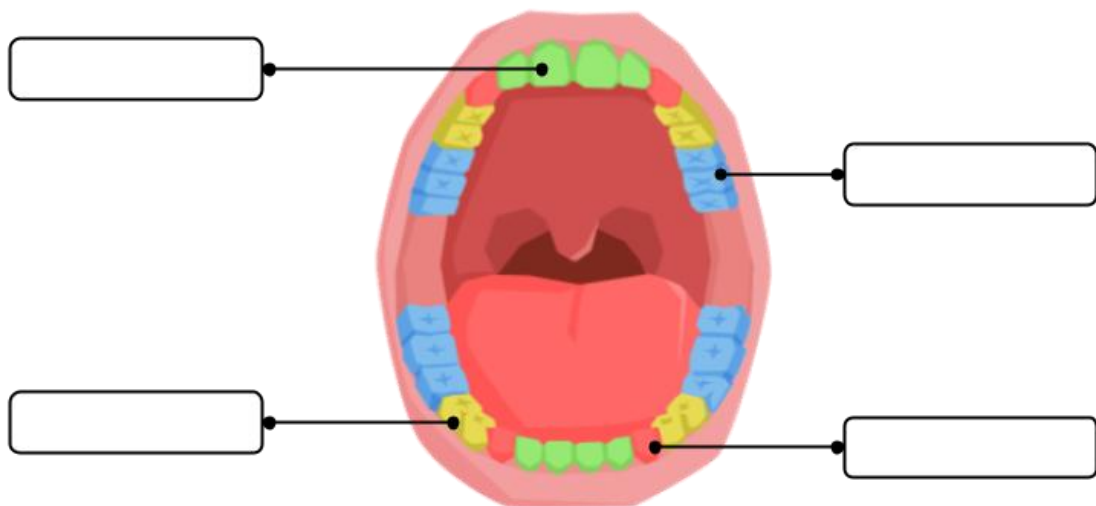
**Q4. Give one word answer:**

**(5 × 1=5)**

- a. Hardest substance in human body \_\_\_\_\_
- b. Something that prevent infection \_\_\_\_\_
- c. Condition of the atmosphere of a place at a particular time \_\_\_\_\_
- d. Magma that reaches the surface of the Earth \_\_\_\_\_
- e. Energy that we get from sun \_\_\_\_\_

**Q5. Label the given diagram:**

**(1 × 4 =4)**



**Q6. Name the picture given**

**(2 × 1 =2)**

\_\_\_\_\_



b. The Red fort in Delhi is made up of \_\_\_\_\_



**Q7. Name these:**

**(4 × 1 = 4)**

a. On the road we should follow

\_\_\_\_\_

b. Factors that determine weather

\_\_\_\_\_

c. The force that resist motion

\_\_\_\_\_

d. Name a wildlife sanctuary

\_\_\_\_\_

**SECTION 'B'**

**Q8. Answer the following questions briefly.**

**(6 × 2=12)**

a. How will you give first aid to minor burn?

\_\_\_\_\_  
\_\_\_\_\_

e

b. What is meant by evaporation?

\_\_\_\_\_  
\_\_\_\_\_

c. What is weathering?

\_\_\_\_\_  
\_\_\_\_\_

d. Why should we conserve natural resources?

\_\_\_\_\_  
\_\_\_\_\_



e. What is a national park? Name two extinct animals.

---

---

f. Write two effects of force?

---

---

**Q9. Answer the following questions.**

**( 6 × 3 = 18)**

a. What is tooth decay?.

---

---

---

---

---

---

---

b. Give first-aid tips for nose bleeding.

---

---

---

---

---

---

---

---

---

---

c. How is soil formed.

---

---

---

---

---

---

d. What is the difference between land breeze and sea breeze?

<b>Land breeze</b>	<b>Sea breeze</b>

e. List the measures to take care of domestic and pet animals?

---

---

---

---

---

---

---

f. What is water energy? How is it related to hydroelectricity?

---

---

---